

Instructions:

1. Please read the questions carefully. All questions are compulsory.
2. Adhere to the time limit.
3. Revise the paper before submitting.

SECTION A**(10x1=10m)****Q1. Choose the correct option.**

We feel through our -

- a. Nose
- b. Eyes
- c. Ears
- d. Skin

1

Q2. The part of the plant which fixes it in the soil is called _____.

- a. Fruit
- b. Root
- c. Stem
- d. Flower

1

Q3. The plants which have very weak stems and cannot grow straight are -

- a. Herbs
- b. Creeper
- c. Shrubs
- d. Climbers

1

Q4. Complete the analogy

Coconut : tree - _____ : shrub

1

Q5. Correct the given statement

Money plant is an example of creeper.


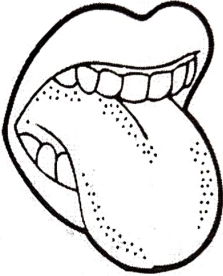
1

Q6. Write True or False

1

Sense organs helps us to sense various things around us _____

Q7. Match the following

	Column A	.	Column B
1	Sense of Taste	a	
2	Sense of Hearing	b	

Write the name of va


Q8.. Circle the Odd One Out

- a. Eyes Fingers Nose Skin
- b. Watermelon Pumpkin rose Muskmelon

1

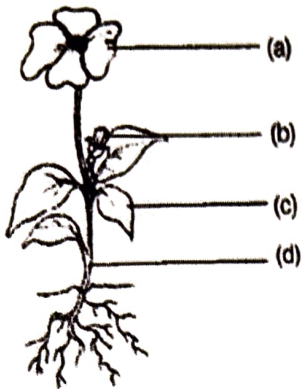
Q9. Draw the sense organ which is used to distinguish between near and far objects.

1



10. Write the name of various parts of a plant

1



Q11. Fill in the blanks-

2×1=2

- i) leaves help to protect clothes and other items from insects.
- ii) Turtle use for swimming.

Q12. Choose the correct option-

2×1=2

- i) For making compost dump the fallen leaves into a pit and cover it with
- a) Dry soil ii) Moist soil iii) Fallen leaves iv) Pit
- ii) An animal that lives in burrow , is a-
- a) Fish ii) Giraffe iii) Penguin iv) Snake

Q13. Correct the statements-

2×1=2

- i) Coriander leaves can be cooked and eaten as vegetable.
- ii) Deer is an aquatic animal.

Q14. Complete the following analogy.

2×1=2

- a) Tulsi : Cough :: Diarrhoea
- ii) Cow: Herbivores :: : Carnivores

SECTION B

2

Q15. What type of stems do shrubs have?

2

Q16. Why should we meditate and exercise regularly?

2

Q17. Fill in the blanks

- a. The strong woody stem of a tree is called the _____
- b. Tomato and mint are examples of _____

2


Q18. Statement 1 : - Brain is a sense organ-

Statement 2 :- Ear help us to differentiate between loud and gentle sounds

- a. Both statements are correct
- b. Statement 1 is correct and 2 is incorrect
- c. Both statements are incorrect
- d. Statement 1 is incorrect and statement 2 is correct.

(2×1=2)

Q19. Observe the picture shown below-



- i) Identify the leaf shown above.
- ii) Write one use of leaf that is shown above.

Q20. Plants shed their leaves. Give reason.

2

MAXT
Note
Th
ec

Q21. Draw and Label the diagram of leaf. 2

Q22. Can polar bear survive in Delhi. Give reason to support your answer. 2

Q23. Skin colours and body patterns of some animals help to save them from danger? 2

Q24. State any two special features which help a camel to survive in a desert. 2

Q25. SECTION C (2X3=6 marks)

Read the paragraph and answer the following questions

Rohit is not coming to school from last three days because of cold and cough. He is not able to smell the things. The doctor has advised him to take rest and asked him to take proper medications.

A Select the organ affected- 1

- 1. Lungs
- 2. Throat

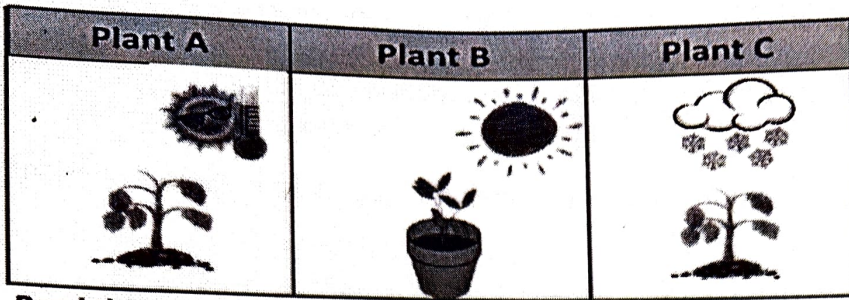
B Choose the doctor he will be visiting to- 1

- 1. ENT
- 2. Veterinary

C Which of the following measure will help in prevention of disease 1

- 1. Eating stale food
- 2. Drinking cold water
- 3. Using mask and taking medications on time

Q26. Sia was observing three plants grown in different situations in the given pictures 3



Read the sentences and fill in the space with A B or C.

Plant _____ cannot grow well because it is too cold.
Snow and frost can kill some plants.

Plant _____ cannot grow well because it is too hot.
Plants need the right amount of warmth, too much sun
can harm them.

Plant _____ can grow well because it is not too hot or
cold. It had the right conditions.

Q27. a) List any two ways that add aroma to our food.

1

b) Write any two uses of leaves.

2

Q28. Answer the following questions-

a) Dolphins are intelligent animals. Justify

1

b) Name your favourite animal. Do you feel it is friendly or not. Justify your answer.

2