

D.A.V. PUBLIC SCHOOL, SECTOR-3, KURUKSHETRA
SUBJECT - ENGLISH
CLASS - III
SUMMER VACATION TASK (2024-25)

ACTIVITIES

- Sing your school prayer and do some yoga daily in the morning.

Project Work

- Have you visited any zoo. If yes. Paste the pictures of animals we can see in the zoo. and write the names of their babies and write their habitat/ home as well.



Worksheet : 1

Make five words from the word

'TRANSPORTATION'.

Example : SPORT

1. _____
2. _____
3. _____
4. _____
5. _____

Worksheet - 2

ARRANGE THE FOLLOWING WORDS IN ALPHABETCAL ORDER

- i) fruit 1. _____
- ii) apple 2. _____
- iii) seeds 3. _____
- iv) plants 4. _____
- v) health 5. _____
- vi) sweet 6. _____
- vii) pie 7. _____
- viii) candle 8. _____
- ix) round 9. _____
- x) banana 10. _____

Worksheet - 3

Sentence Building

Rewrite the sentences to make them meaningful.

- homework/ almost / my / is / complete

- flowers /everywhere / there / are / the spring / during

- land / of / India / farmers / is a

- hair / is / Michael's / dark / very
-

- runs / fast / cheetah / very
-

- often go / we / library / to
-

- sipped / some water / the sparrow
-

- the computer / is working on / my neighbour
-

- sand wiches / for breakfast / eat / they
-

- soccer / he plays / his friends / with
-

Worksheet - 4

Choose the right word by putting a tick on one of the two nouns against each sentence.

- To buy milk we go to a _____. (diary, dairy)
- To know a date, month or a day, we consult a _____. (calendar, diary)
- We pay bus fare to the _____. (conductor, driver)
- We look for meanings of words in a _____. (book, dictionary)

- e) The king lives in a _____. (house, palace)
- f) When you are ill, you go to a _____.
(doctor, policeman)
- g) Girls like to play with _____. (dolls, toys)
- h) Delhi is a _____. (city, island)
- (i) We put _____ on shoes. (polish, paint)
- (j) Flowers grow on _____. (plants, thorns)

Worksheet - 5

Tick the correct spelling of the four options given in the followings sets.

1. a) Vacation b) Vaccation c) Vacasion d) Vecation
2. a) behaviour b) bihaviour c) behaviour d) beheiour
3. a) asinment b) assignmant c) assignment d) asignment
4. a) language b)languige c) languaze d) language
5. a) grammar b) gramar c) grammer d) grammerr
6. a) vocabulery b) vocebulary c) vocabulary d) vocabulry
7. a) intresting b) interesting c) intresteng d) intiresting
8. a) asesment b) assesment c) assesment d) assessment
9. a) program b) programme c) programe d) progremme
10. a) excitement b) exitement c) excitment d) excitmant

Worksheet-6

7. Let's enrich our vocabulary

Injure, jump, leave, hard, pretty, arrive, harm, quit, leap, beautiful, solid, honour, respect, reach, noticed, saw.

Pick out the words that carry the same meaning and put them in the boxes.

Example

<ul style="list-style-type: none">• arrive• reach	
--	--

--

--

--

--

--

--

--

Worksheet - 7

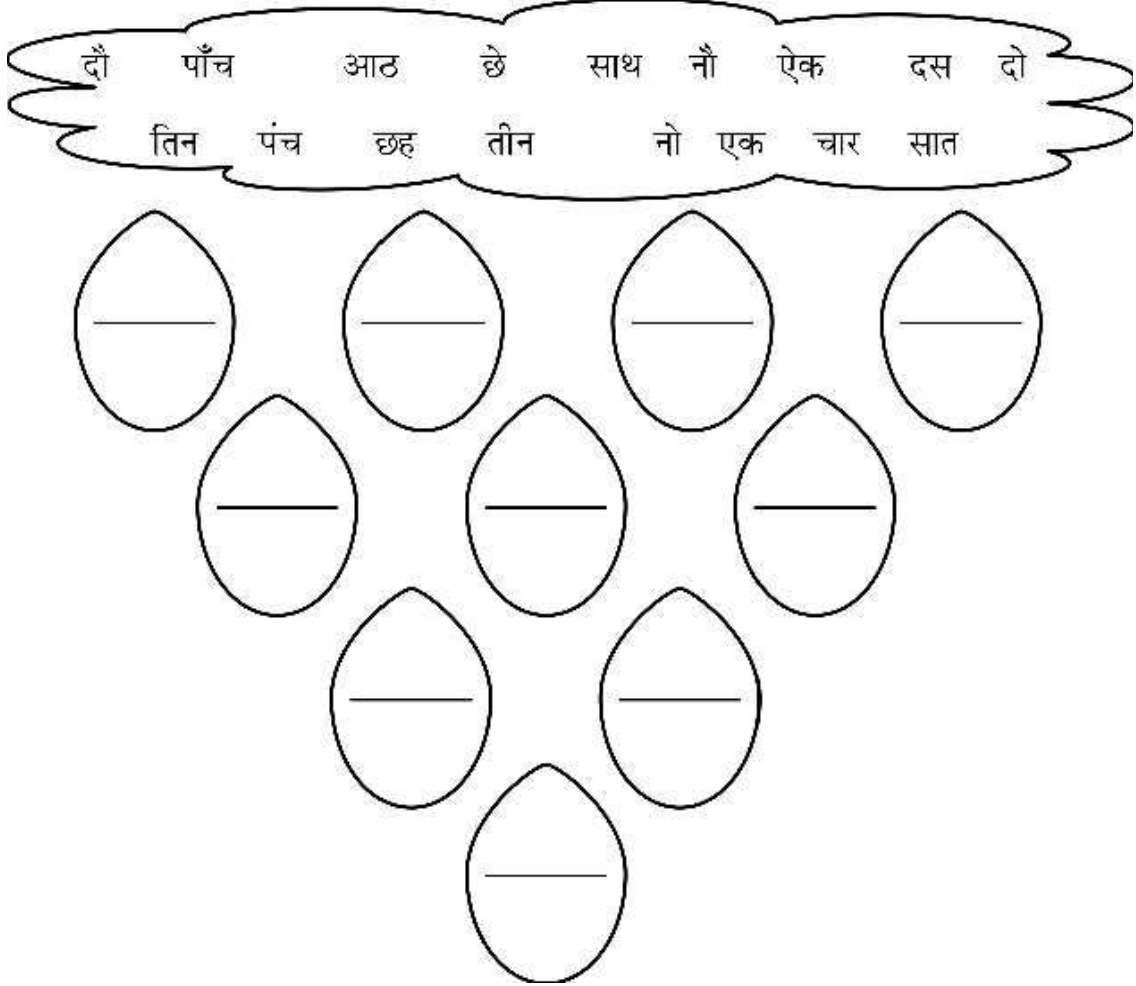
Read the short passage and tick the correct answer the questions.

Monkeys love to play around. They live on trees. They love to eat bananas. They are very naughty. They have furry bodies, long legs and hands, and a tail that can be used to catch and hold things. A group of monkeys is called troop.

1. Where do the monkeys live ?
a) trees b) den c) kennel
2. What do monkeys like to eat ?
a) fish b) banana c) orange
3. Monkeys have a _____ to hold things.
a) arm b) leg c) tail
4. What is a group of monkeys called ?
a) bunch b) pride c) troop
5. Find out the opposites of the given words from the passage.
a) hate _____ b) short _____

विषय -हिन्दी

1. बादल से छाँटकर सिर्फ शुद्ध बूँदों की वर्षा कीजिए -

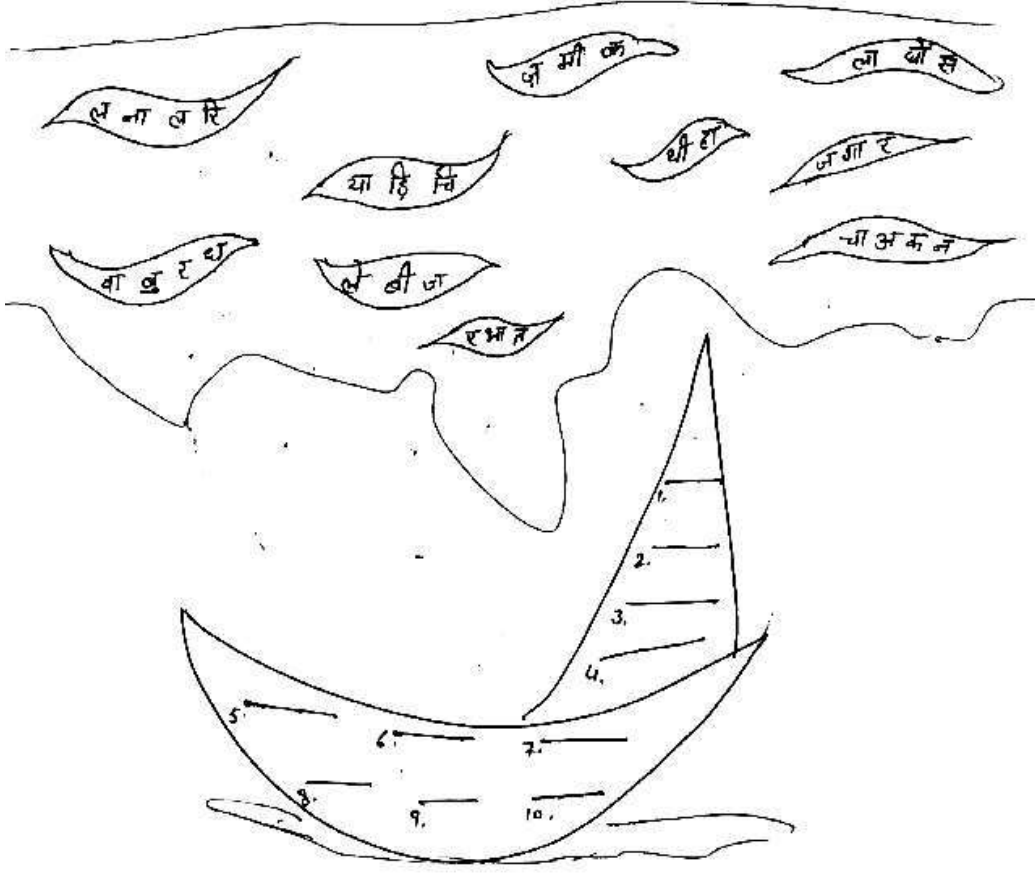


2. चलों, शब्दों को रंगों से बदलें -

- ★ टमाटर : लाल
- ★ कसरत : पीला
- ★ नटखट : हरा
- ★ बादल : नीला
- ★ रात : काली




3. समुद्र की लहरों से शब्द बनाकर नाव में रखिए -




4. दिए गए वाक्यों में से संज्ञा शब्दों को नीले रंग से घेरा लगाइए -
लता हलवा बना रही है।

- 1) मैं पाठशाला जा रहा हूँ।
- 2) मेरी कमीज़ नीली है।
- 3) शेर तेज़ दौड़ता है।
- 4) अजय पढ़ रहा है।
- 5) राजू जलेबी खा।
- 6) चिड़िया उड़ गई।



5. गिनती जोड़कर चित्र बनाइए -



6. पेड़े से शब्द तोड़कर कहानी पूरी कीजिए -

जंगल में एक रहती थी। एक दिन उसे लगी।


उसने अपनी मित्र को देखा और कहा, मुझे

. भूख लगी है। क्या तुम मेरी कर सकती हो?


..... ने कहा, “हाँ, जरूर। मैं एक का टुकड़ा

तुम्हारे लिए अपनीमें रख कर ले आती हूँ।” चिड़िया से फल का

..... ले जाती है। गिलहरी नेकहकर उस टुकड़े को लिया।



7. चित्र देखकर नीचे दिए गए वाक्य पूर्ण करो।



(छः सात हिरण बंदर हाथी-बाघ)


- 1) ऊपर दिए चित्र में कुल पक्षी है।
- 2) चित्र में कुल जानवर है।
- 3) चित्र में तीन दौड़ रहे हैं।
- 4) पेड़ पर कौन से जानवर लटक रहे हैं
- 5) चित्र में एक और एक हैं।

8. वाक्य में संज्ञा शब्द लिखकर चित्र भी बनाइए -

क) आकाश में चमक रहा है।




ख) बाग में खिले हैं।



ग) जलने से अंधकार दूर हो जाता है।



घ) बंदर पर बैठा है।



ङ) बच्चे से खेल रहे हैं।



SUBJECT : MATHEMATICS

Name _____ Roll No. _____ Date _____

1. Fill ups:

- i) A number that comes just after a number is called its
- ii) 1 tens = ones
- iii) $200 + 400 + 300 =$
- iv) The predecessor of smallest 4-digit number has digits.
- v) Number to be added is called .
- vi) The result obtained after subtraction is called .
- vii) Place value of 7 in 6 7 43 =
- viii) Which number is greater
 $300 + 40$ $200 + 80 + 9$
- ix) Successor of the largest 3-digit number =
- x) 10 less than 8000 =

2. Write the predecessor and successor of given number.

Predessor	Number	Successor
_____	5950	_____
_____	3999	_____
_____	6800	_____

3. Write number names :

a) 4168 = _____

b) 2050 = _____

c) 9008 = _____

4. Write numerals for :-

a) Seven thousand two hundred ten _____

b) Five thousand twenty _____

c) Six thousand nine hundred seventy six _____

5. Complete the table

Digits	Greatest	Smallest	Sum	Differnce
1, 3, 5, 0	_____	_____	_____	_____
9, 8, 0, 6	_____	_____	_____	_____
5, 4, 7, 0	_____	_____	_____	_____

6. Arrange and add

i) 3175 ; 408 and 26

ii) 4096; 517 and 92

7. Subtract and check your answer.

Subtract

Check

i) $5078 - 2169$

ii) $8000 - 918$

Activity based

1. Collect registration number of 5 cars in your locality.

a) Write Registration number

_____, _____, _____, _____, _____

b) Arrange them in ascending order

_____, _____, _____, _____, _____

c) Write number name of the greatest number

_____ = _____

d) Write expanded form of the smallest number (1 way)

2. Find these numbers in the given chart and colour them as given.




Blue 	Green 	Red 
$20 + 30$	Predecessor of 2000	Eight thousand two
Seven thousand five hundred nine	Five thousand ten	$70 - 50$
Successor of 2199	$80 - 20$	one more than 2038
Predecessor of 3000	$128 + 0$	$2000 + 50 + 7$

Chart Required with this question)

Chart

2999	5010	2039	60
8002	1999	50	128
2057	20	2200	7509

3. Each of the ball has several numbers. The students has to apply Addition / subtraction on numbers to get the required answer.

Multiplication Times Tables Mazes

4. Can you find the path?

How do you find the path? You start in the upper left corner. For examples if above the puzzle is written 5 times Table, then the first tile will have the answer of 5×1 , which is 5. Color this tile. Then look around this tile (Left, right, up or down) to find a tile with the answer of 2×5 . Color this tile and so on. Until you have reached the tile in the right bottom corner of the puzzle.

Good luck!

6 Times Table

6	24	30	36
12	18	33	42
16	21	25	48
17	25	38	54
21	22	32	60



5 Times Table

5	10	13	17
14	15	20	19
16	24	25	28
24	35	30	31
43	40	45	50



2 Times Table

2	8	9	12
4	10	12	15
6	8	14	19
7	12	16	18
10	13	17	20



4 Times Table

4	16	20	24
8	12	18	28
9	10	25	32
10	13	15	36
11	14	29	40



4. My mother has Rs. 5860 in her purse. She went to market and spent Rs.3175 on groceries. Find how much money is left with her.

Case Study Questions :

One Sunday Mohan and his parents went to the market. Mohan went to market and spent Rs. 5250 on buying mobile, Rs.785 on Books and Rs. 290 on Pencils. He was very happy.

- i) How much money is spent on Books?
- ii) How much total money spent in all?
- iii) On which article maximum money was spent by Mohan?
- iv) How many articles were purchased by Mohan?

SUBJECT - SCIENCE WORKSHEET - 1

MY FIVE SENSES

1. Complete the sentences with senses.

Sight, Hearing, Smell, Taste, Touch.

1. My sister is listening to her brother talking she is using the sense of _____.
2. I can see many cats in the park. I am using the sense of _____.
3. The pizza smells delicious. I am using the sense of _____.
4. I can feel the air on my face. I am using the sense of _____.
5. The chocolate cake is really good. Ummm! I am using the sense of _____.

2. Complete the sentences by dragging the cards.

Listen to music

Touch things

See the sun and the moon

Smell food

Taste food

I use my eyes to _____.

I use ears to _____.

I use my tongue to _____.

I use my nose to _____.

I use my skin to _____.

Worksheet - 2

Herbs shrubs and trees

For each of the sentence

Mark-1 if true for herbs.

Mark-2 if true for shrubs

Mark-3 if true for trees

1. They have soft green stems.
2. They have thick trunks.
3. Rose plant is an example.
4. Mango plant is an example.
5. Thyme is an example.
6. They often die after one season.
7. The stem is woody but thin.
8. They are used by gardeners as bushes.

Worksheet - 3

Complete the sentence by choosing the most appropriate word from the list given below.

tongue, smell, touch, eyes, hear, ears, skin, see, taste,
nose, move, balance

1. I taste food with my _____.



2. I use my eyes to _____.



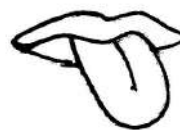
3. I hear the birds chirping with my _____.

4. I use my skin to _____.



5. I smell the flowers with my _____.

6. I use my tongue to _____.



7. I see the world with my _____.

8. I use my ears to _____.



9. I touch the feathers with my _____.

10. I use my nose to _____.

Worksheet - 4

Label the senses on the right. Draw a line to match each picture to a sense.



Worksheet - 5

Plant Assessment

Write three things that plants need to live and grow.

1. _____ .
2. _____ .
3. _____ .
4. Do plants need food to grow?
Yes or No
5. Do plants need space to grow?
Yes or No

Fill in the blanks with a word given in the box below.

roots stem leaves seed flower

6. The _____ makes the food for the plant.
7. The part of the plant that acts like a straw to carry water from the roots to the leaves is the _____.
8. The _____ make the seed and fruit.
9. The _____ absorbs water from the soil.
10. A plants start as a _____.

Note - 1. Paste pictures of sense organs in scrap book. 2. Paste pictures of herbs, shrubs, trees, creepers and climbers (five each) in scarap book.

Value and Ethical Application of concepts "Save Earth".

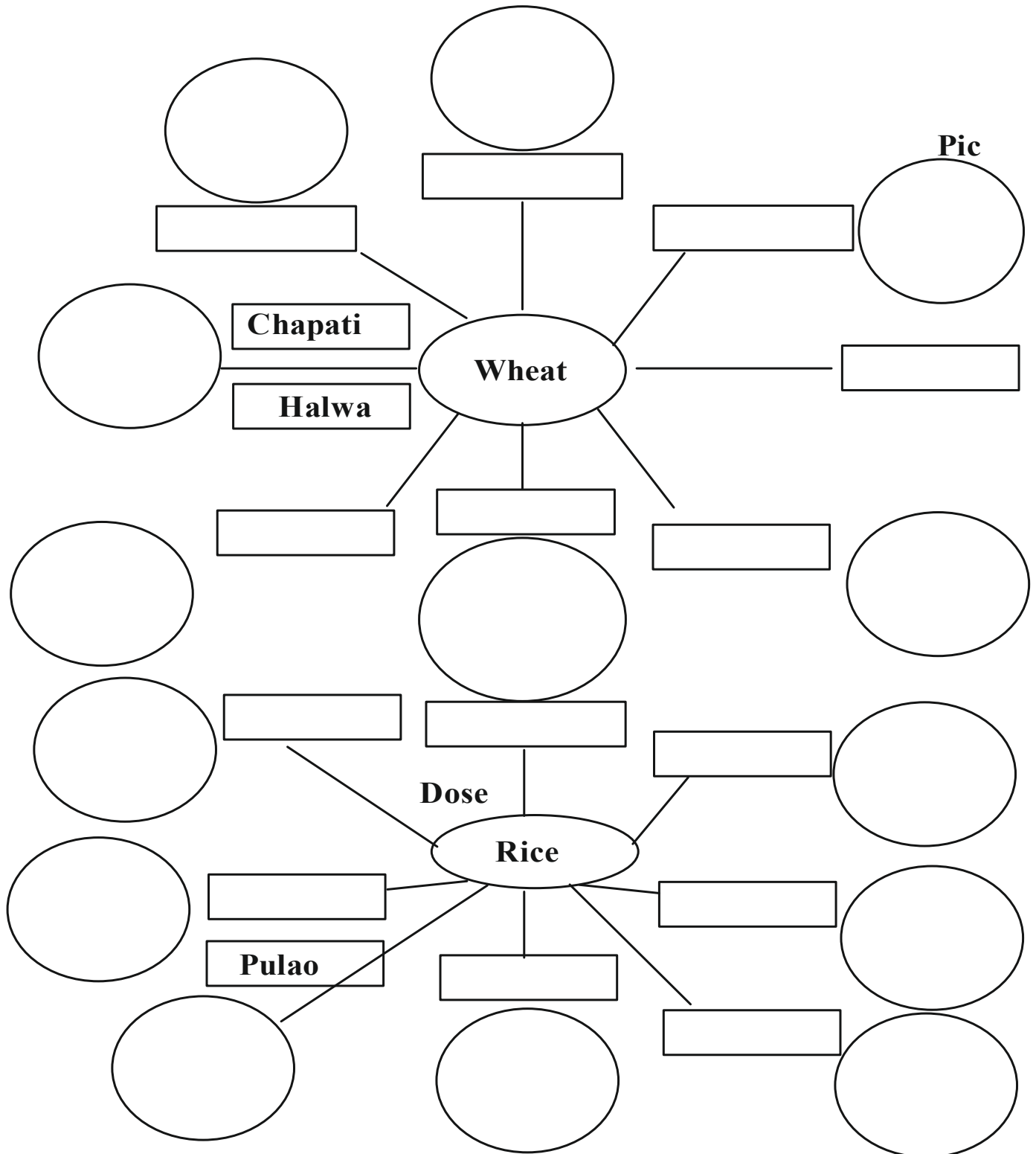
"Plant at least one sapling and take proper care of it during vacations.

- Click one picture with your plant and paste it in fair notebook. (2marks for it)

SOCIAL SCIENCE

Our Food


1. Complete the following diagrams as per your understanding.



* Write the name in the box.

* Paste the picture of food item in a circle.

2. Complete the cross words.



DOWN

1. a family in which parents live with married children.
2. capital of India.
3. Vishu 's maternal grandparents live in this city.
5. Sandesh is the sweet dish of this state.
7. a Maharashtra dish.

ACROSS

4. you live in this state.
6. we should take this kind of diet.

3. Map Skills

Colour and label the following states in the political map of India.

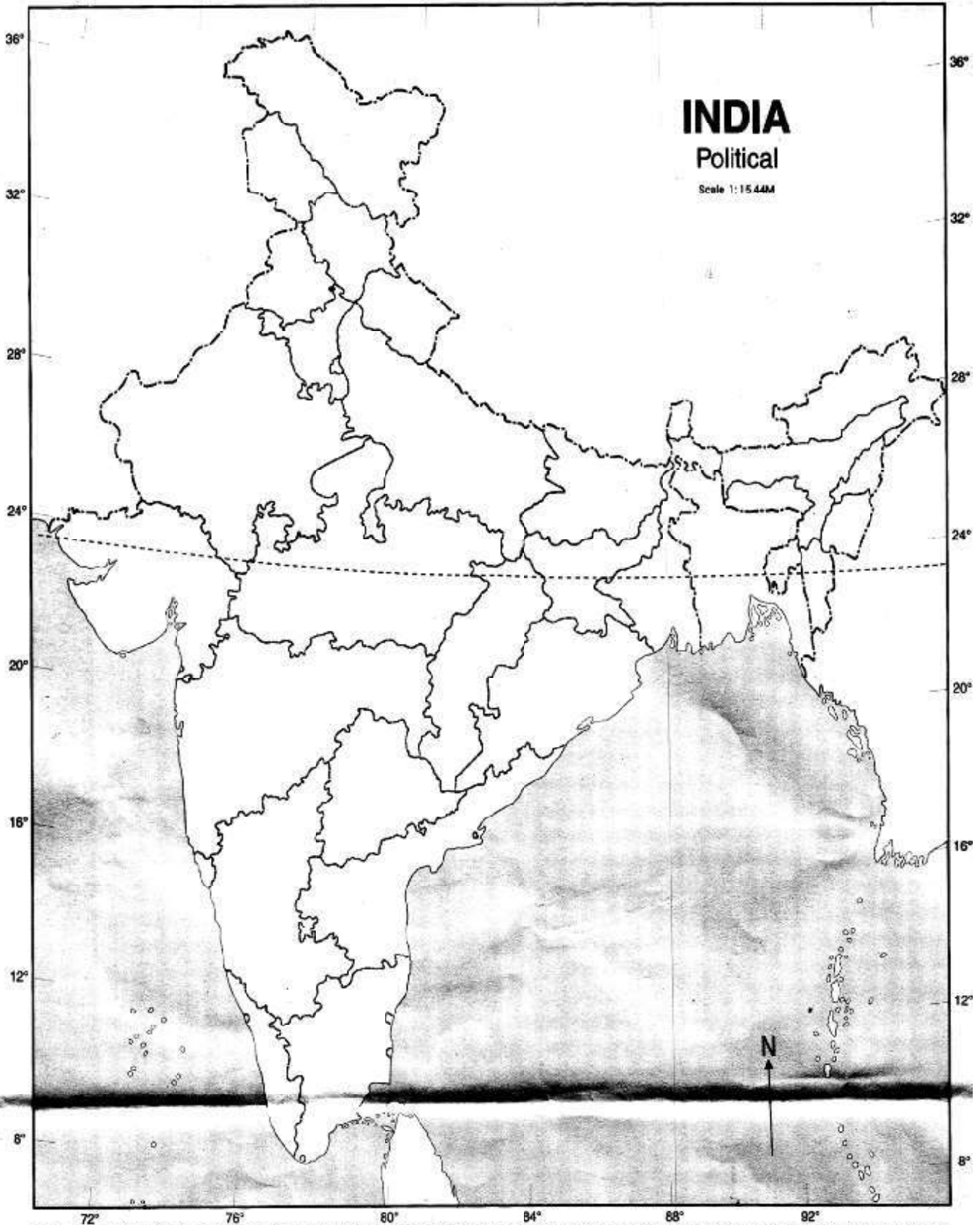
- a) A state that is called the rice bowl of India _____
- b) Name the Capital of India _____
- c) Name the State in which you live _____
- d) Konark temple is located in this state _____
- e) Beautiful Taj Mahal is located in this state _____

Name Date



Std. Div. Roll No.

68° 72° 76° 80° 84° 88° 92° 96°



..... for the convenience of internal details refer to the publisher. The territorial waters of India extend into the sea to a distance of twelve